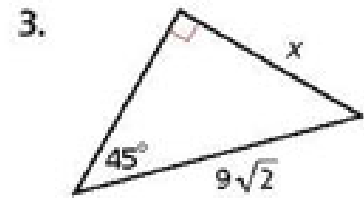
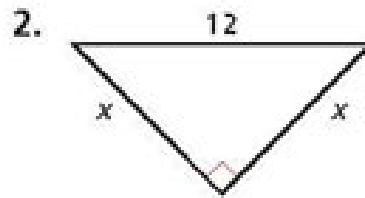
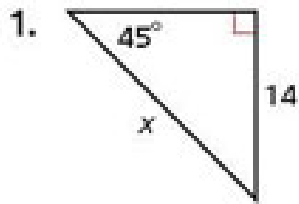
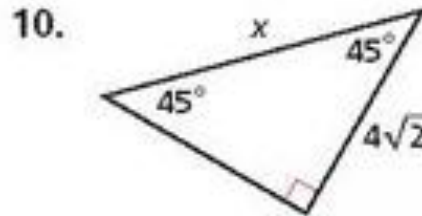
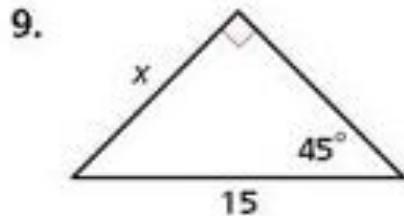


Find the value of x . Give your answer in simplest radical form.



Find the value of x . Give your answer in simplest radical form.



11.

Multi-Step Find the perimeter and area of each figure.
Give your answers in simplest radical form.

19. a square with diagonal length 18 meters