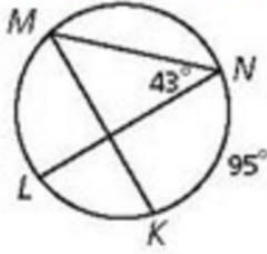


12.4 Homework Day 2
 pg. 824: 12-15, 21, 22, 39

Find each measure.

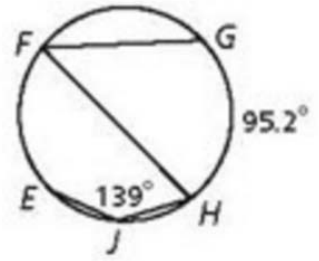
12. $m\widehat{ML}$

13. $m\angle KMN$



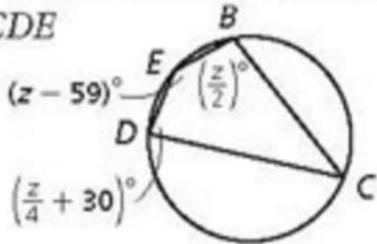
14. $m\widehat{EGH}$

15. $m\angle GFH$

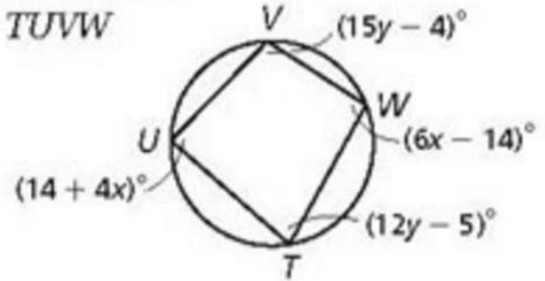


Multi-Step Find the angle measures of each quadrilateral.

21. $BCDE$



22. $TUVW$



39. What is $m\angle BAC$?

(A) 38°

(C) 66°

(B) 43°

(D) 81°

