

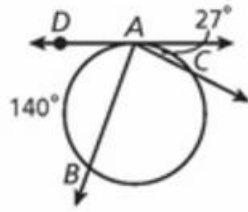
12.5 HOMEWORK

PAGE 834 #S 1, 2, 5, 8-10, 21, 24, 25, 27, 28

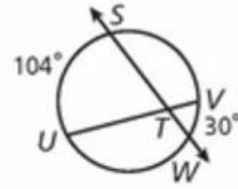
Find each measure.

1. $m\angle DAB$

2. $m\widehat{AC}$

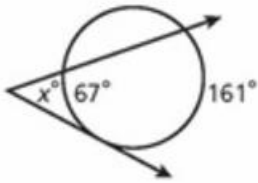


5. $m\angle STU$

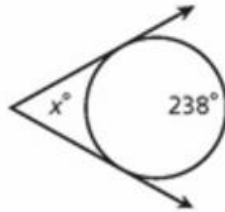


Find the value of x .

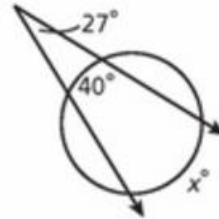
8.



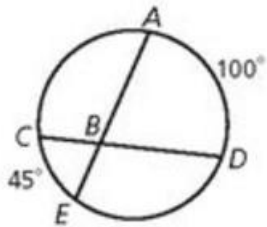
9.



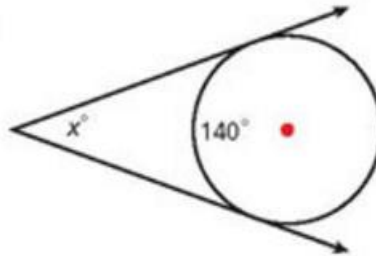
10.



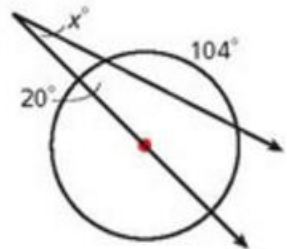
21. $m\angle ABC$



24.



25.



Multi-Step Find each measure.

27. $m\widehat{EG}$

28. $m\widehat{DE}$

