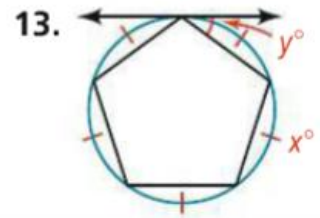
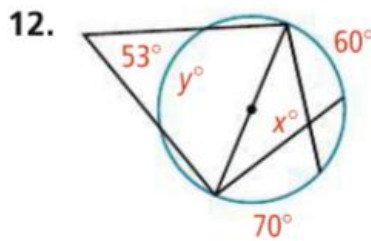
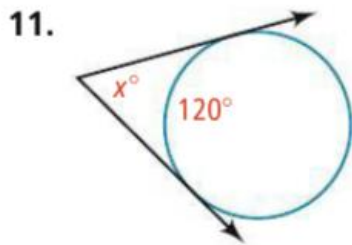
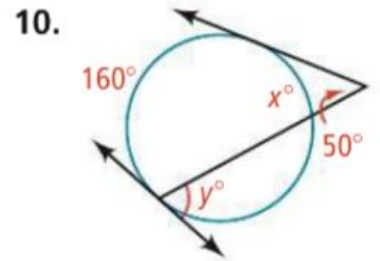
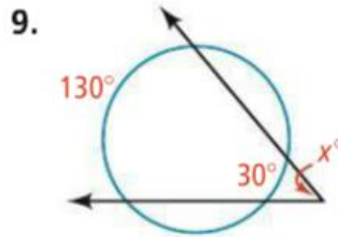
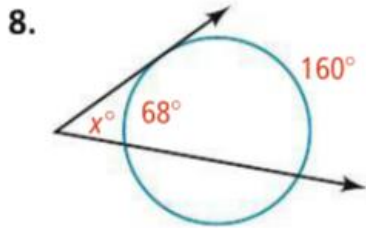


Algebra Find the value of each variable.

See Problem

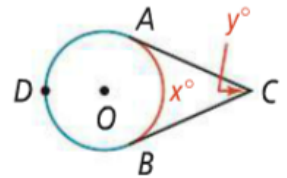


Algebra \overline{CA} and \overline{CB} are tangents to $\odot O$. Write an expression for each arc or angle in terms of the given variable.

21. $m\widehat{ADB}$ using x

22. $m\angle C$ using x

23. $m\widehat{AB}$ using y



30. $\triangle PQR$ is inscribed in a circle with $m\angle P = 70$, $m\angle Q = 50$, and $m\angle R = 60$. What are the measures of \widehat{PQ} , \widehat{QR} , and \widehat{PR} ?