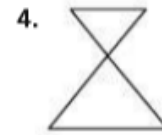
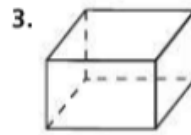
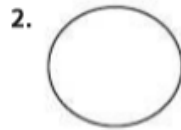



Exercises

Is the figure a polygon? If not, explain why.



Classify the polygon by its number of sides. Tell whether the polygon is *convex* or *concave*.

