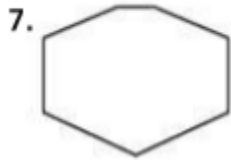


Find the sum of the interior angle measures of each polygon.



8. 35-gon

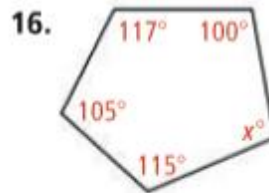
9. 14-gon

Find the measure of one interior angle in each regular polygon.

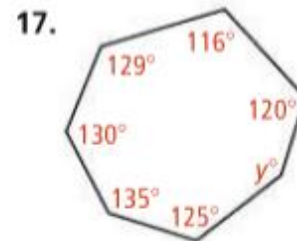
← See Problem 2.



Algebra Find the missing angle measures.



← See Problem 3.



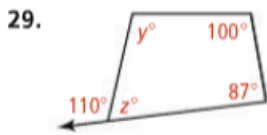
Find the measure of an exterior angle of each regular polygon.

18. pentagon

19. 36-gon

20. 18-gon

Algebra Find the value of each variable.



30.

The measure of an exterior angle of a regular polygon is given. Find the measure of an interior angle. Then find the number of sides.

34. 18