

Find each measure.

11. GJ

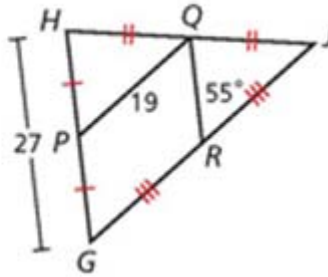
12. RQ

13. RJ

14. $m\angle PQR$

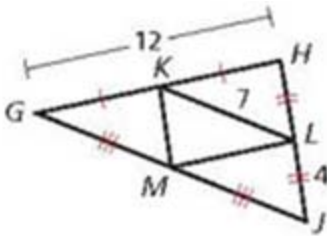
15. $m\angle HGJ$

16. $m\angle GPQ$



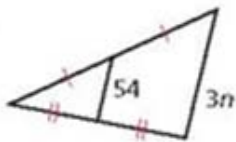
$\triangle KLM$ is the midsegment triangle of $\triangle GHJ$.

18. What is the perimeter of $\triangle GHJ$?

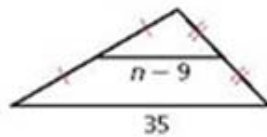


Algebra Find the value of n in each triangle.

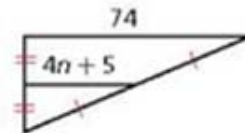
21.



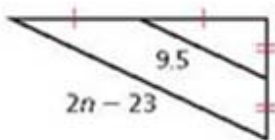
22.



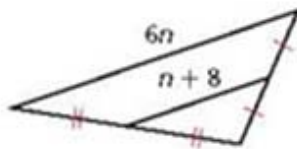
23.



24.



25.



26.

