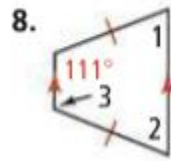
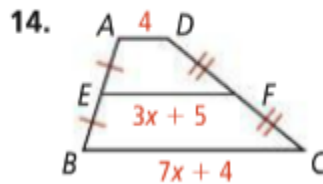
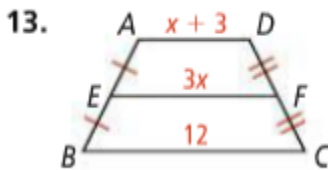


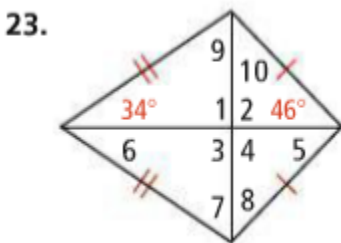
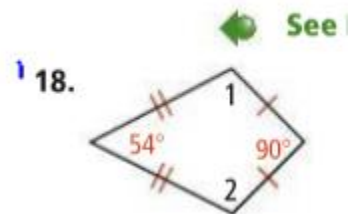
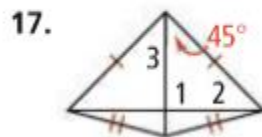
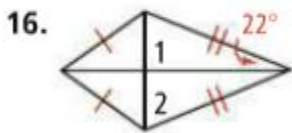
Find the measures of the numbered angles in each isosceles trapezoid.



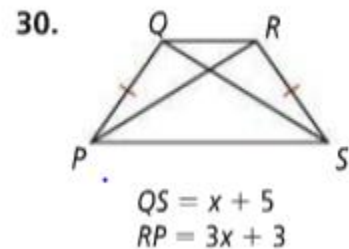
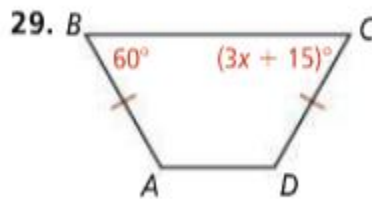
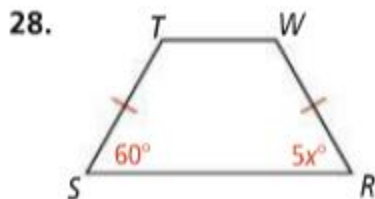
Find EF in each trapezoid.



Find the measures of the numbered angles in each kite.



Algebra Find the value of the variable in each isosceles trapezoid.



Determine whether each statement is *true* or *false*. Justify your response.

57. All squares are rectangles.

58. A trapezoid is a parallelogram.

59. A rhombus can be a kite.

60. Some parallelograms are squares.

61. Every quadrilateral is a parallelogram.

62. All rhombuses are squares.