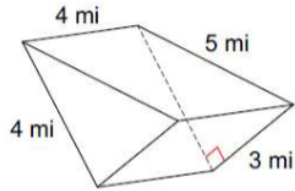


Geometry – Test Review for Surface Area and Volume

Name: _____

Find the LSA, TSA, and Volume for the following figures. Leave answers exact (with π in the answer).

1.

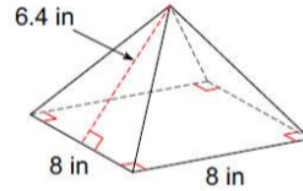


LSA: _____

TSA: _____

Volume: _____

2.

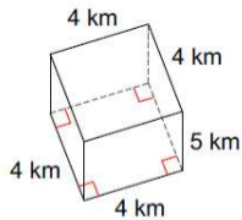


LSA: _____

TSA: _____

Volume: _____

3.

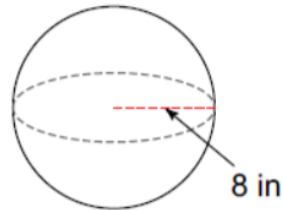


LSA: _____

TSA: _____

Volume: _____

4.



LSA: _____

TSA: _____

Volume: _____